



musiceducationwhiz.com

Name:

Date:

Intervals Worksheet

Name the following intervals in the same way as we ask for in question number 1. Use the Intervals page on www.musiceducationwhiz.com to help you. You may also need to review clefs on our Pitch page:

- 1) (a) Compound (delete if necessary)
(b) Major/Minor/Perfect/Augmented/Diminished (delete as appropriate)
(c) Interval: _____



- 2) (a)
(b)
(c)

- 3) (a)
(b)
(c)

- 4) (a)
(b)
(c)



- 5) (a)
(b)
(c)

- 6) (a)
(b)
(c)

- 7) (a)
(b)
(c)



- 8) (a)
(b)
(c)

- 9) (a)
(b)
(c)


- 10) (a)
(b)
(c)



- 11) (a)
(b)
(c)

- 12) (a)
(b)
(c)

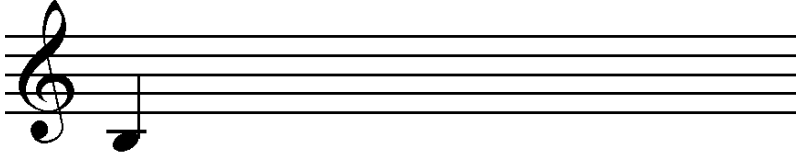




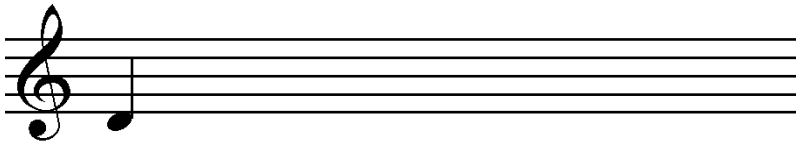
musiceducationwhiz.com

Now write out the following melodic intervals using the note provided as the lowest note:


- 1) Perfect 5th




- 2) Minor 3rd




- 3) Compound Major 2nd



- 4) Diminished 4th



- 5) Augmented 6th



- 6) Compound Diminished 3rd

